


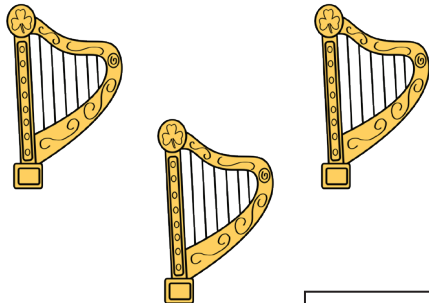








St. Patrick's Day COUNTING

How many of each item do you see?
Write the number in each box.




St. Patrick's Day ADDITION

Count each set of items, and then add them up.
Put your answer into the box provided.




+




=



+



=




+




=



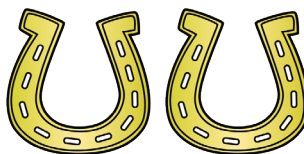
+



=



+



=










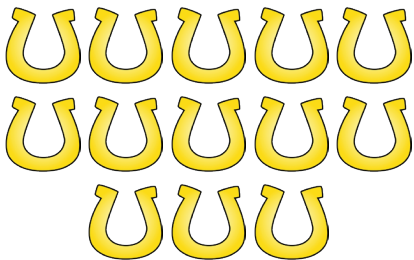


+



=

St. Patrick's Day SUBTRACTION


Count how many items there are.
Put this number into the box on the left.
Subtract the number shown and
give your answer in the box on the right.

 <input type="text"/> - 4 = <input type="text"/>	 <input type="text"/> - 5 = <input type="text"/>	 <input type="text"/> - 6 = <input type="text"/>
 <input type="text"/> - 3 = <input type="text"/>	 <input type="text"/> - 7 = <input type="text"/>	
 <input type="text"/> - 4 = <input type="text"/>	 <input type="text"/> - 2 = <input type="text"/>	 <input type="text"/> - 8 = <input type="text"/>
 <input type="text"/> - 5 = <input type="text"/>	 <input type="text"/> - 3 = <input type="text"/>	

St. Patrick's Day POTS OF GOLD










What is the number inside the shamrock?

Draw that many coins in each of the pots of gold.



St. Patrick's Day NUMBER BONDS

Our rainbows are number bonds. Give two numbers that make up the number bonds in the clouds. Then complete the suns below to all make that same number. Watch out to make sure you have added or subtracted as you are asked!


<p style="text-align: center;">10</p>  <table border="1" style="width: 100%;"> <tr><td> </td><td>+</td><td> </td><td>=</td><td> </td></tr> <tr><td> </td><td>+</td><td> </td><td>=</td><td> </td></tr> <tr><td> </td><td>-</td><td> </td><td>=</td><td> </td></tr> <tr><td> </td><td>-</td><td> </td><td>=</td><td> </td></tr> </table>		+		=			+		=			-		=			-		=		<p style="text-align: center;">7</p>  <table border="1" style="width: 100%;"> <tr><td> </td><td>+</td><td> </td><td>=</td><td> </td></tr> <tr><td> </td><td>+</td><td> </td><td>=</td><td> </td></tr> <tr><td> </td><td>-</td><td> </td><td>=</td><td> </td></tr> <tr><td> </td><td>-</td><td> </td><td>=</td><td> </td></tr> </table>		+		=			+		=			-		=			-		=		<p style="text-align: center;">15</p>  <table border="1" style="width: 100%;"> <tr><td> </td><td>+</td><td> </td><td>=</td><td> </td></tr> <tr><td> </td><td>+</td><td> </td><td>=</td><td> </td></tr> <tr><td> </td><td>-</td><td> </td><td>=</td><td> </td></tr> <tr><td> </td><td>-</td><td> </td><td>=</td><td> </td></tr> </table>		+		=			+		=			-		=			-		=	
	+		=																																																											
	+		=																																																											
	-		=																																																											
	-		=																																																											
	+		=																																																											
	+		=																																																											
	-		=																																																											
	-		=																																																											
	+		=																																																											
	+		=																																																											
	-		=																																																											
	-		=																																																											
<p style="text-align: center;">9</p>  <table border="1" style="width: 100%;"> <tr><td> </td><td>+</td><td> </td><td>=</td><td> </td></tr> <tr><td> </td><td>+</td><td> </td><td>=</td><td> </td></tr> <tr><td> </td><td>-</td><td> </td><td>=</td><td> </td></tr> <tr><td> </td><td>-</td><td> </td><td>=</td><td> </td></tr> </table>		+		=			+		=			-		=			-		=		<p style="text-align: center;">12</p>  <table border="1" style="width: 100%;"> <tr><td> </td><td>+</td><td> </td><td>=</td><td> </td></tr> <tr><td> </td><td>+</td><td> </td><td>=</td><td> </td></tr> <tr><td> </td><td>-</td><td> </td><td>=</td><td> </td></tr> <tr><td> </td><td>-</td><td> </td><td>=</td><td> </td></tr> </table>		+		=			+		=			-		=			-		=		<p style="text-align: center;">17</p>  <table border="1" style="width: 100%;"> <tr><td> </td><td>+</td><td> </td><td>=</td><td> </td></tr> <tr><td> </td><td>+</td><td> </td><td>=</td><td> </td></tr> <tr><td> </td><td>-</td><td> </td><td>=</td><td> </td></tr> <tr><td> </td><td>-</td><td> </td><td>=</td><td> </td></tr> </table>		+		=			+		=			-		=			-		=	
	+		=																																																											
	+		=																																																											
	-		=																																																											
	-		=																																																											
	+		=																																																											
	+		=																																																											
	-		=																																																											
	-		=																																																											
	+		=																																																											
	+		=																																																											
	-		=																																																											
	-		=																																																											
<p style="text-align: center;">13</p>  <table border="1" style="width: 100%;"> <tr><td> </td><td>+</td><td> </td><td>=</td><td> </td></tr> <tr><td> </td><td>+</td><td> </td><td>=</td><td> </td></tr> <tr><td> </td><td>-</td><td> </td><td>=</td><td> </td></tr> <tr><td> </td><td>-</td><td> </td><td>=</td><td> </td></tr> </table>		+		=			+		=			-		=			-		=		<p style="text-align: center;">18</p>  <table border="1" style="width: 100%;"> <tr><td> </td><td>+</td><td> </td><td>=</td><td> </td></tr> <tr><td> </td><td>+</td><td> </td><td>=</td><td> </td></tr> <tr><td> </td><td>-</td><td> </td><td>=</td><td> </td></tr> <tr><td> </td><td>-</td><td> </td><td>=</td><td> </td></tr> </table>		+		=			+		=			-		=			-		=		<p style="text-align: center;">5</p>  <table border="1" style="width: 100%;"> <tr><td> </td><td>+</td><td> </td><td>=</td><td> </td></tr> <tr><td> </td><td>+</td><td> </td><td>=</td><td> </td></tr> <tr><td> </td><td>-</td><td> </td><td>=</td><td> </td></tr> <tr><td> </td><td>-</td><td> </td><td>=</td><td> </td></tr> </table>		+		=			+		=			-		=			-		=	
	+		=																																																											
	+		=																																																											
	-		=																																																											
	-		=																																																											
	+		=																																																											
	+		=																																																											
	-		=																																																											
	-		=																																																											
	+		=																																																											
	+		=																																																											
	-		=																																																											
	-		=																																																											

St. Patrick's Day MULTIPLICATION


How many dice do you see?
What are the numbers on the dice?
Now multiply these numbers together
and put your answers on the sheets.




$$= \square \times \square = \square$$




$$= \square \times \square = \square$$




$$= \square \times \square = \square$$



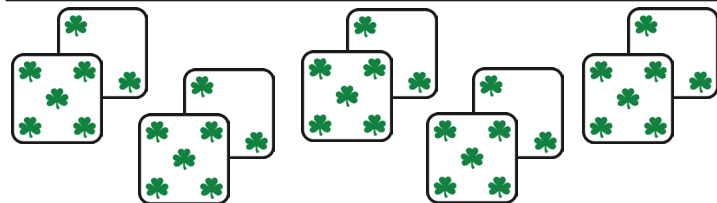
$$= \square \times \square = \square$$




$$= \square \times \square = \square$$



$$= \square \times \square = \square$$



$$= \square \times \square = \square$$



$$= \square \times \square = \square$$



$$= \square \times \square = \square$$